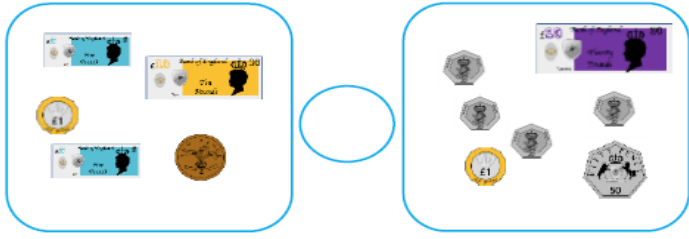
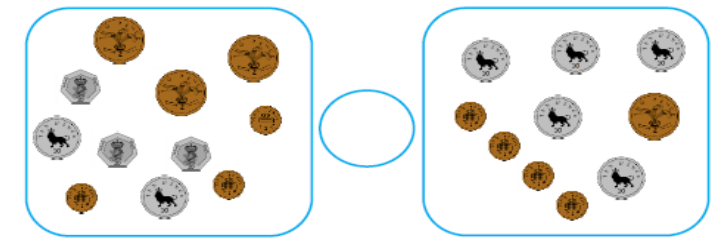
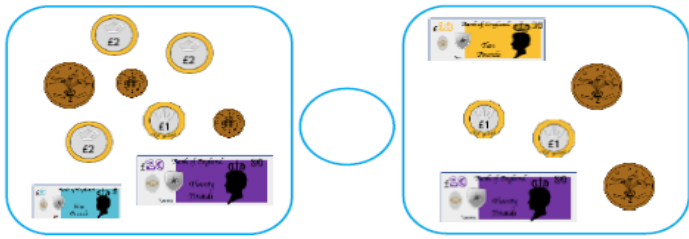
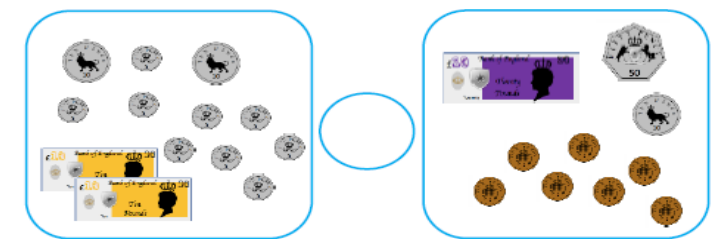


Compare money.

Use comparison symbols to compare the coins.




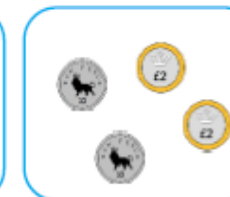

> = <

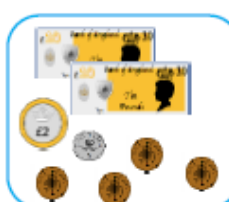



	
--	--



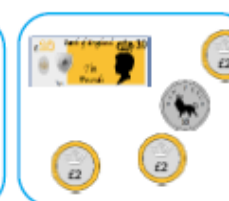

	
--	--

Look at each row.

Tick the box with the greatest amount. Place a cross in the box with the least amount.

 <input style="width: 30px; height: 20px;" type="checkbox"/>	<p>four pounds and eighteen pence</p> <input style="width: 30px; height: 20px;" type="checkbox"/>	 <input style="width: 30px; height: 20px;" type="checkbox"/>	 <input style="width: 30px; height: 20px;" type="checkbox"/>	 <input style="width: 30px; height: 20px;" type="checkbox"/>	 <input style="width: 30px; height: 20px;" type="checkbox"/>
---	---	--	---	--	--

<p>twenty-six pounds and fifty-four pence</p> <input style="width: 30px; height: 20px;" type="checkbox"/>	 <input style="width: 30px; height: 20px;" type="checkbox"/>	 <input style="width: 30px; height: 20px;" type="checkbox"/>	 <input style="width: 30px; height: 20px;" type="checkbox"/>	<p>twenty-six pounds and forty-five pence</p> <input style="width: 30px; height: 20px;" type="checkbox"/>	 <input style="width: 30px; height: 20px;" type="checkbox"/>
---	--	--	---	---	--

 <input style="width: 30px; height: 20px;" type="checkbox"/>	 <input style="width: 30px; height: 20px;" type="checkbox"/>	<p>forty-nine pounds and thirteen pence</p> <input style="width: 30px; height: 20px;" type="checkbox"/>	 <input style="width: 30px; height: 20px;" type="checkbox"/>	 <input style="width: 30px; height: 20px;" type="checkbox"/>	<p>twenty-six pounds and forty-five pence</p> <input style="width: 30px; height: 20px;" type="checkbox"/>
---	--	---	---	--	---